

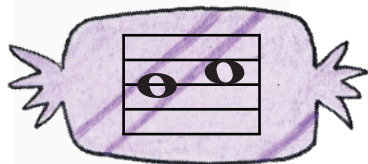
Name: _____

Date: _____


Intervals of 2nd, 3rd, 4th & 5th




Match each candy to its correct interval.



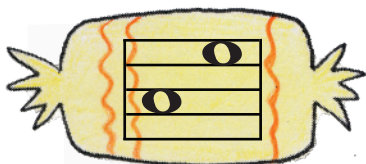
↘ 3rd



↗ 2nd



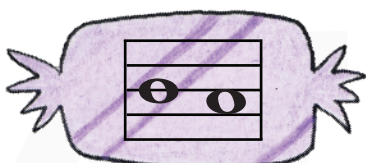
↗ 4th




↘ 4th



↗ 5th



↗ 3rd



↘ 2nd